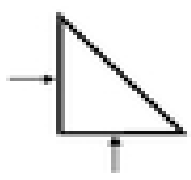
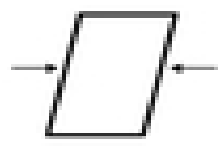




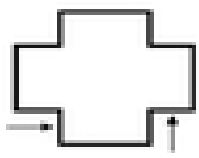
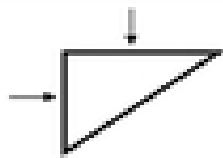
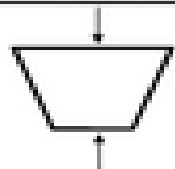


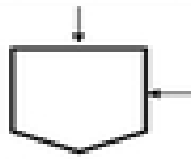


### Identifying Parallel and Perpendicular Lines

For each figure below, describe the relationship between the lines indicated.  
Write *parallel* or *perpendicular* in the space provided.

 1. _____	 2. _____	 3. _____
 4. _____	 5. _____	 6. _____
 7. _____	 8. _____	 9. _____
 10. _____	 11. _____	 12. _____