

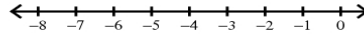
Multi-Step Inequalities

Solve each inequality and graph its solution.

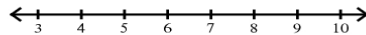
1) $-3x + 2x \leq 6$



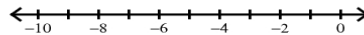
2) $3 - 6n - 4 < 17$



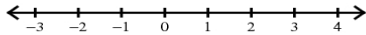
3) $n - 3 + 4 > 7$



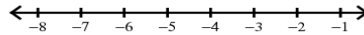
4) $0 < n - 1 + 6$



5) $-3x - 2x < 5$



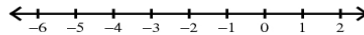
6) $-(2 + 2m) - 2 > 6$




7) $-9 \geq -8(1 + 6v) - 1$



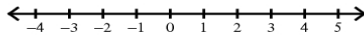
8) $8(1 - 4x) > 40$



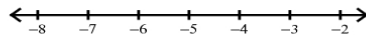
9) $4(8 - 2b) - 2b \leq 32$



10) $5x - 7(x + 1) > -9$



11) $-p + 6p \leq 4 + 6p$



12) $5 + 4x \geq x + 8$

