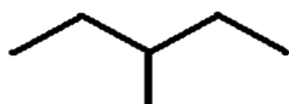


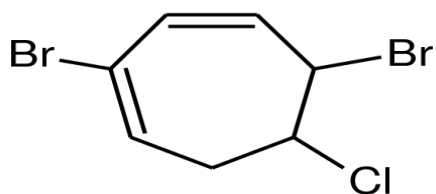
## Organic Compound Naming Worksheet

Write the name of each of the following organic compounds:

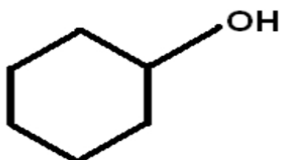
1)



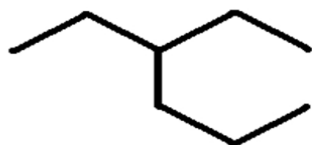
2)



3)



4)



5)

