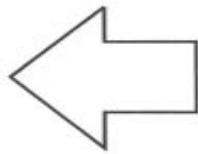



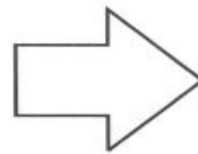
# Where Is It?













Write the direction **left** or **right**.



**Left**



**Right**

1. The  is to the \_\_\_\_\_ of the .
2. The  is to the \_\_\_\_\_ of the .
3. The  is to the \_\_\_\_\_ of the .
4. The  is to the \_\_\_\_\_ of the .
5. The  is to the \_\_\_\_\_ of the .