

Name _____




Classmate
Picture graph

Trimming the Tree

 Cut.


 Glue to match.



 ornament				
 bulb				
 candy cane				

 Circle.

1. Which has the least?



2. Which has the most?



