

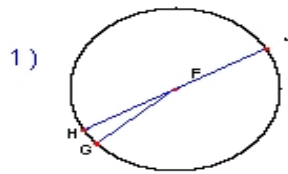
Name : _____

Score : _____

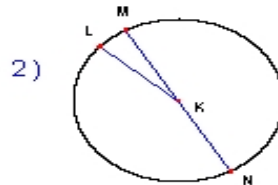
Teacher : _____

Date : _____

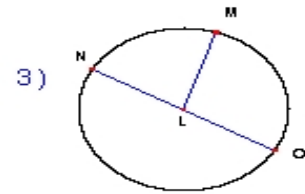
Solve the missing elements for each problem. Use 3.14 for Pi.



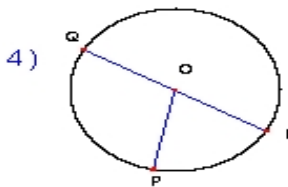
Radius: _____
Diameter: 22 inches
Circumference: _____
Area: _____



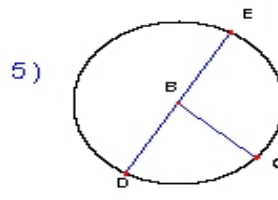
Radius: _____
Diameter: 6 ft
Circumference: _____
Area: _____



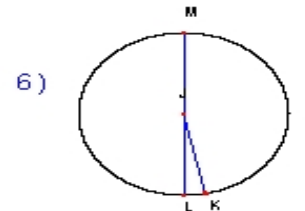
Radius: 19 yards
Diameter: _____
Circumference: _____
Area: _____



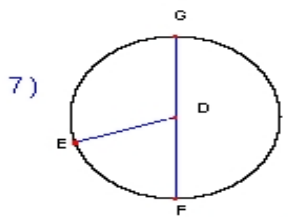
Radius: _____
Diameter: 24 cm
Circumference: _____
Area: _____



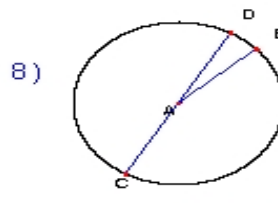
Radius: _____
Diameter: 4 mm
Circumference: _____
Area: _____



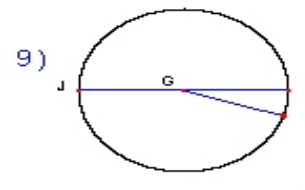
Radius: _____
Diameter: 16 inches
Circumference: _____
Area: _____



Radius: 10 ft
Diameter: _____
Circumference: _____
Area: _____



Radius: 20 yards
Diameter: _____
Circumference: _____
Area: _____



Radius: 5 cm
Diameter: _____
Circumference: _____
Area: _____