



Easter Egg Ratios (A)

Find the Easter egg ratio for each set of eggs.


1.  :  = : =




2.  :  = : =



3.  :  = : =



4.  :  = : =



Bonus: Simplify each ratio if necessary.

Happy Easter from Math-Drills.Com!