

















Name _____

Making Change

Learn how to correctly count coins.

How many of each coin would you use to come up with each amount of money?
Follow the example.

| | | | | |
|---------------|-------------------------------------------------------------------------------------|-------------------------------------------------------------------------------------|---------------------------------------------------------------------------------------|---------------------------------------------------------------------------------------|
| | 3 | 1 | 1 | 1 |
| | pennies | nickels | dimes | quarters |
| \$0.43 |  |  |  |  |
| | | | | |
| | pennies | nickels | dimes | quarters |
| \$0.77 |  |  |  |  |
| | | | | |
| | pennies | nickels | dimes | quarters |
| \$0.18 |  |  |  |  |
| | | | | |
| | pennies | nickels | dimes | quarters |
| \$0.94 |  |  |  |  |