


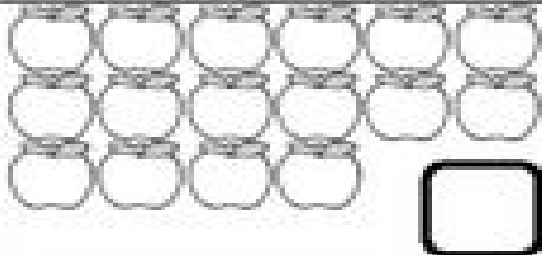


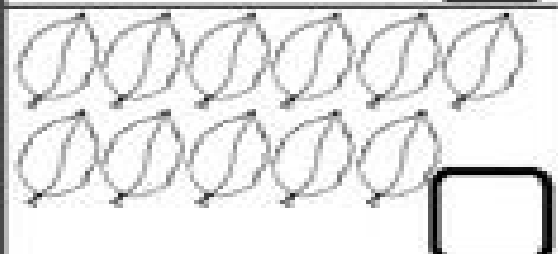
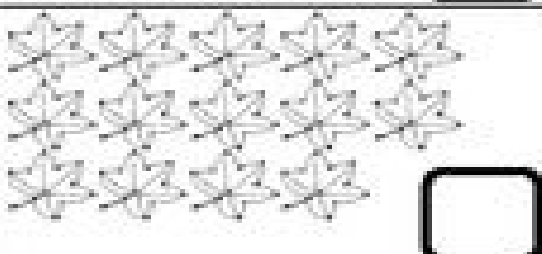


Date: _____

Count and write how many are in each box.

 <input data-bbox="654 571 782 683" type="text"/>	 <input data-bbox="1220 571 1348 683" type="text"/>
 <input data-bbox="654 840 782 952" type="text"/>	 <input data-bbox="1220 840 1348 952" type="text"/>
 <input data-bbox="654 1108 782 1220" type="text"/>	 <input data-bbox="1220 1108 1348 1220" type="text"/>
 <input data-bbox="654 1366 782 1478" type="text"/>	 <input data-bbox="1220 1366 1348 1478" type="text"/>