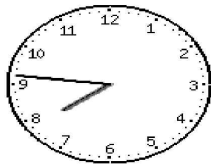
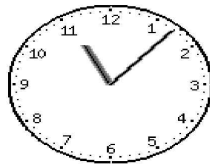


# Clock Worksheet

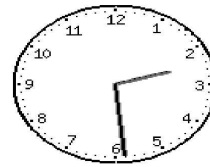
Write the time to the nearest 5 minutes



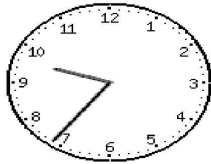
**1a**     \_\_\_ : \_\_\_



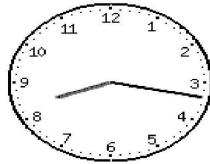
**1b**     \_\_\_ : \_\_\_



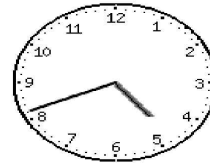
**1c**     \_\_\_ : \_\_\_



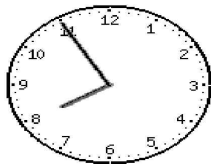
**2a**     \_\_\_ : \_\_\_



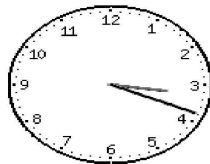
**2b**     \_\_\_ : \_\_\_



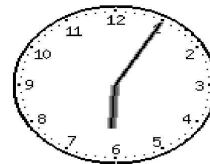
**2c**     \_\_\_ : \_\_\_



**3a**     \_\_\_ : \_\_\_



**3b**     \_\_\_ : \_\_\_



**3c**     \_\_\_ : \_\_\_