


# Are You A Square?

How does your height compare with your arm span?




1. Make a prediction. How many centimeters tall do you think you are? How many centimeters wide is your arm span? Measure to find out.

I think my height is \_\_\_\_\_ cm. My height is \_\_\_\_\_ cm.


I think my arm span is \_\_\_\_\_ cm. My arm span is \_\_\_\_\_ cm.

2. Color in the two graphs to show how tall you are and how wide your arm span is.


3. Are you a square, a tall rectangle, or a wide rectangle?



Height = arm span



Height > arm span



Height < arm span

I am a \_\_\_\_\_

arm span

