

Name : _____

Score : _____

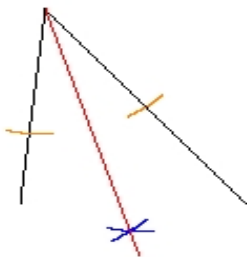
Teacher : _____

Date : _____

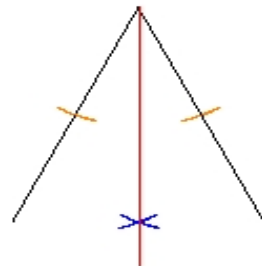
Angle Bisector Constructions

For each angle, construct the angle bisector.

1)

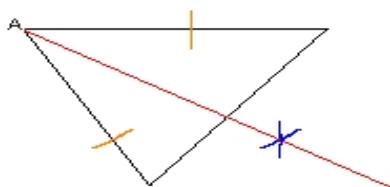


2)



For each triangle, construct the angle bisector of angle A.

3)



4)

