


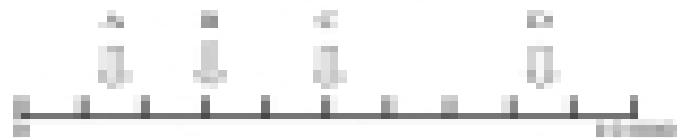
Write these questions to prepare to use them and get your answers.

1. This line shows the number up to 10,000 divided into thousands. Draw an arrow to show the following numbers (the first ten have been for you).

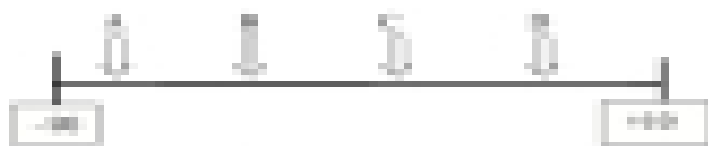
6,000, 7,000, 8,000, 9,000, 10,000



2. Where are the arrows pointing on this line?



3. Where are the arrows pointing on this line?



4. Where are the arrows pointing on this line?

