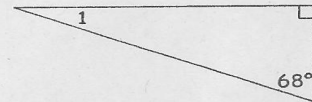


Triangles Quiz


1. All angles in a triangle add up to 180°.

2. Find the measure of each numbered angle:

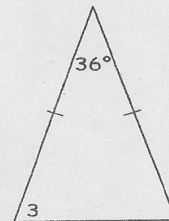
a)  $\angle 1 = \underline{22^\circ}$



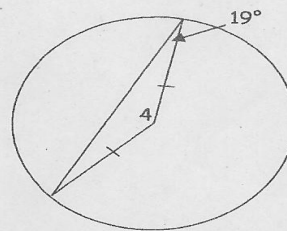
b)  $\angle 2 = \underline{114^\circ}$



c)  $\angle 3 = \underline{72^\circ}$



d)  $\angle 4 = \underline{142^\circ}$



e)  $\angle 5 = \underline{111^\circ}$

f)  $\angle 6 = \underline{39^\circ}$

