

Types of Triangles Quiz

1. List two ways to classify triangles:

- a) by comparing the length of each side
 b) by measuring the angles.

2. Classify each triangle in two different ways using the following terms:


scalene
 isosceles

equilateral
 right

acute
 obtuse

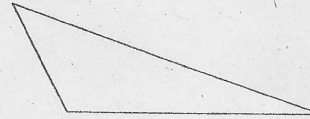
a) right

scalene




b) obtuse

scalene



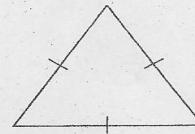
c) acute

isosceles



d) acute

equilateral



e) obtuse

isosceles



f) right

isosceles

