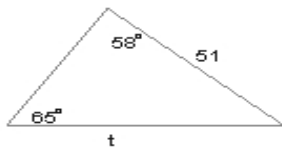


Name : \_\_\_\_\_ Score : \_\_\_\_\_  
 Teacher : \_\_\_\_\_ Date : \_\_\_\_\_

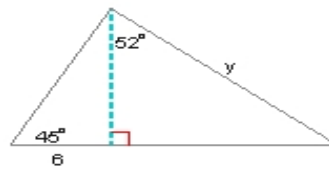
### Multi-Step Problems

**Find the variable side. Round the intermediate and final values to the nearest tenth.**

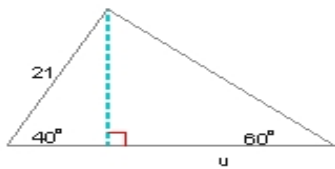
1)  $t =$  \_\_\_\_\_



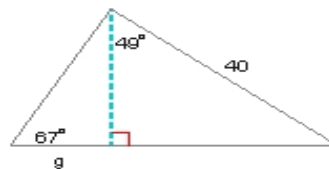
2)  $y =$  \_\_\_\_\_



3)  $u =$  \_\_\_\_\_

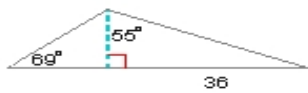


4)  $g =$  \_\_\_\_\_



**Find the area of each triangle. Round the intermediate and final values to the nearest tenth.**

5) Area = \_\_\_\_\_



6) Area = \_\_\_\_\_

