

Write each missing number.

1



3




5

6

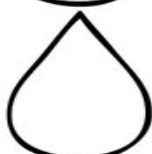


8



10

11




13




15

16




18



20

21



23




25

26



28



30