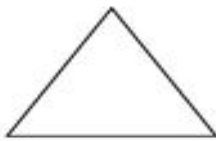


Name: \_\_\_\_\_  
Date: \_\_\_\_\_

Subject: Year 3 Numeracy  
Sheet: 2D shapes

### 2D shapes

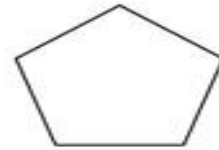
Name each shape and count how many sides each shape has got.



name \_\_\_\_\_  
sides \_\_\_\_\_



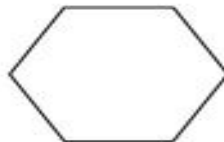
name \_\_\_\_\_  
sides \_\_\_\_\_



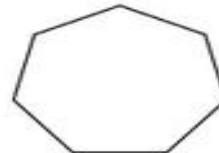
name \_\_\_\_\_  
sides \_\_\_\_\_



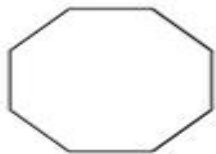
name \_\_\_\_\_  
sides \_\_\_\_\_



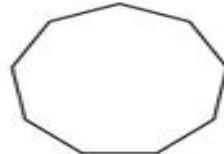
name \_\_\_\_\_  
sides \_\_\_\_\_



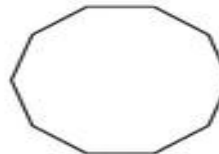
name \_\_\_\_\_  
sides \_\_\_\_\_



name \_\_\_\_\_  
sides \_\_\_\_\_



name \_\_\_\_\_  
sides \_\_\_\_\_



name \_\_\_\_\_  
sides \_\_\_\_\_