



Name _____




Reindeer Ten Frames




Directions: Read the math problem on the reindeer sign. Color the boxes two different colors to show the problem. Write the number sentence with the sum on the line.


 _____ + _____ = _____


_____ + _____ = _____




 _____ + _____ = _____


_____ + _____ = _____



 _____ + _____ = _____

_____ + _____ = _____



 _____ + _____ = _____

_____ + _____ = _____

