

28. The Pythagorean Theorem

Find the unknown lengths of the sides in the following triangles:

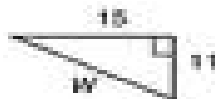
1.



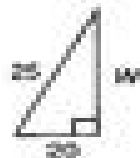
2.



3.



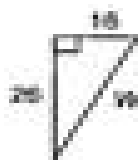
4.



5.



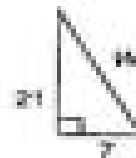
6.



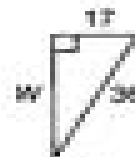
7.



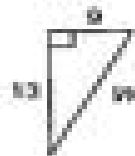
8.



9.



10.



11.



12.

