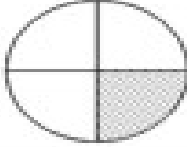
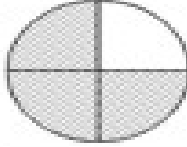




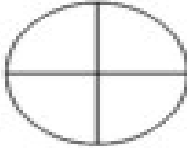
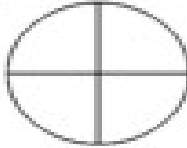






Name _____

1.  = $\frac{\square}{\square}$	7.  = $\frac{\square}{\square}$
2.  = $\frac{2}{4}$	8.  = $\frac{1}{4}$
3.  = $\frac{\square}{\square}$	9.  = $\frac{\square}{\square}$
4.  = $\frac{1}{4}$	10.  = $\frac{3}{4}$
5.  = $\frac{\square}{\square}$	11.  = $\frac{\square}{\square}$
6.  = $\frac{2}{4}$	12.  = $\frac{3}{4}$