






Colour the circles to
find the missing number.

$3 + \square = 10$	
$\square + 4 = 10$	
$5 + \square = 10$	
$\square + 2 = 10$	
$1 + \square = 10$	
$6 + \square = 10$	