

Unit 2: Worksheet 2
 Domain and Range

Name _____
 Period _____

In 1 – 7, give the domain and range for each of the following, then determine whether it's a function.

1.

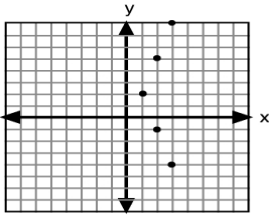
x	y
-4	-5
-3	-8
-2	-11
-1	-14

Domain: _____
 Range: _____
 Function? _____

2. $\{(9, 0), (0, 9), (4, 5), (5, 4)\}$

Domain: _____
 Range: _____
 Function? _____

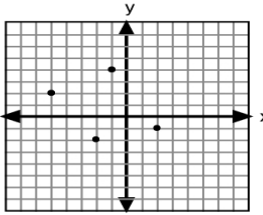
3.



Ordered Pairs: _____

Domain: _____
 Range: _____
 Function? _____

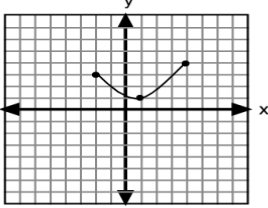
4.



Ordered Pairs: _____

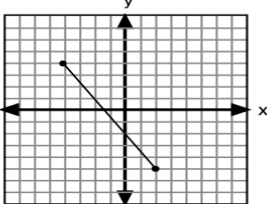
Domain: _____
 Range: _____
 Function? _____

5.



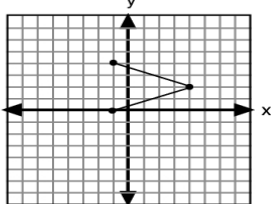
Domain: _____
 Range: _____
 Function? _____

6.



Domain: _____
 Range: _____
 Function? _____

7.



Domain: _____
 Range: _____
 Function? _____