

Unit 2: Worksheet 2  
 Domain and Range

Name \_\_\_\_\_  
 Period \_\_\_\_\_

**In 1 – 7, give the domain and range for each of the following, then determine whether it's a function.**

1.

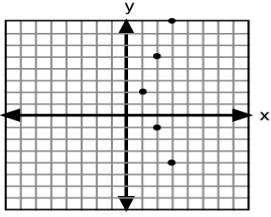
x	y
-4	-5
-3	-8
-2	-11
-1	-14

Domain: \_\_\_\_\_  
 Range: \_\_\_\_\_  
 Function? \_\_\_\_\_

2.  $\{(9, 0), (0, 9), (4, 5), (5, 4)\}$

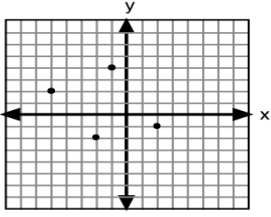
Domain: \_\_\_\_\_  
 Range: \_\_\_\_\_  
 Function? \_\_\_\_\_

3.



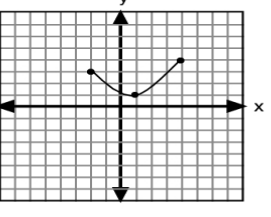
Ordered Pairs: \_\_\_\_\_  
 Domain: \_\_\_\_\_  
 Range: \_\_\_\_\_  
 Function? \_\_\_\_\_

4.



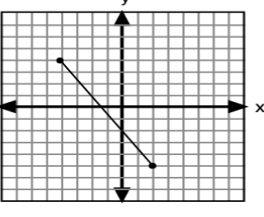
Ordered Pairs: \_\_\_\_\_  
 Domain: \_\_\_\_\_  
 Range: \_\_\_\_\_  
 Function? \_\_\_\_\_

5.



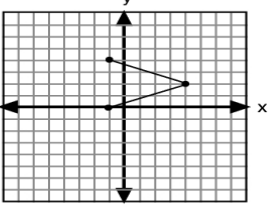
Domain: \_\_\_\_\_  
 Range: \_\_\_\_\_  
 Function? \_\_\_\_\_

6.



Domain: \_\_\_\_\_  
 Range: \_\_\_\_\_  
 Function? \_\_\_\_\_

7.



Domain: \_\_\_\_\_  
 Range: \_\_\_\_\_  
 Function? \_\_\_\_\_