


Name _____


Decimals and Fractions

Identify decimal model amounts and write equivalent fractions.


Write the decimal and equivalent fraction represented by the model.




1. 0.80 , $\frac{80}{100}$




2. _____




3. _____



4. _____



5. _____



6. _____