


Name \_\_\_\_\_

## Commutative Property of Multiplication

Write an equation that represents the array to show the commutative property of multiplication.

Example:




$$4 \times 6$$

=



$$6 \times 4$$

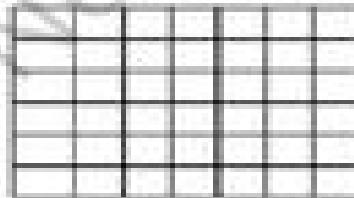
1.




$$\times$$

=

$$\times$$




2.



$$\times$$

=



$$\times$$