

**(2.NBT.6) Review: Complete the number sentence**




$13 + 24 + 20 = \underline{\hspace{2cm}}$

$45 + 17 = 17 + \underline{\hspace{2cm}}$

$32 + 15 + 22 = \underline{\hspace{2cm}}$

$134 + 24 = \underline{\hspace{1cm}} + 24$

**(2.NBT.1) Review: Write the number represented by the base ten blocks**

	H	T	O
			
			
			

Write the number

\_\_\_\_\_

\_\_\_\_\_

\_\_\_\_\_

**(2.NBT.8) Review: Mentally add and subtract 100**

What is 100 more than ...

What is 100 less than ...

224 \_\_\_\_\_

224 \_\_\_\_\_

432 \_\_\_\_\_

432 \_\_\_\_\_

332 \_\_\_\_\_

332 \_\_\_\_\_

804 \_\_\_\_\_

804 \_\_\_\_\_