


(2.NB.T.3) Review Place Value: Complete the Chart.

Number Word	Number	Expanded Form	Model
			
		400 + 10 + 7	

(2.NB.T.7) Review Addition

$$\begin{array}{r} 23 \\ + 16 \\ \hline \end{array}$$

$$\begin{array}{r} 253 \\ + 229 \\ \hline \end{array}$$

$$\begin{array}{r} 239 \\ + 102 \\ \hline \end{array}$$

$$\begin{array}{r} 89 \\ + 42 \\ \hline \end{array}$$

(2.NB.T.7) Review Subtraction

$$\begin{array}{r} 23 \\ - 16 \\ \hline \end{array}$$

$$\begin{array}{r} 93 \\ - 78 \\ \hline \end{array}$$

$$\begin{array}{r} 232 \\ - 112 \\ \hline \end{array}$$

$$\begin{array}{r} 485 \\ - 246 \\ \hline \end{array}$$

(2.NB.T.4) Review Comparing Numbers: Use >, <, =



$143 \bigcirc 134$

$100 \bigcirc 98$

$500 \bigcirc 50$

$895 \bigcirc 598$

(2.OA.3) Review Odd / Even Numbers: Write whether the group of teddy bears is odd or even.

 _____	 _____
--	---