










Name \_\_\_\_\_




### Modeling Addition of Decimals

Directions: Use the shaded parts of the grids to model the sum of each addition problem. Next, work out the problem using the space below each grid.

1.  +  =   
0.8 + 0.5 = \_\_\_\_\_

2.  +  =   
0.8 + 0.7 = \_\_\_\_\_

3.  +  =   
0.30 + 0.80 = \_\_\_\_\_

4.  +  =   
0.30 + 0.80 = \_\_\_\_\_