










Name _____




Modeling Addition of Decimals

Directions: Use the shaded parts of the grids to model the sum of each addition problem. Next, work out the problem using the space below each grid.

1.  +  = 
0.8 + 0.5 = _____

2.  +  = 
0.8 + 0.7 = _____

3.  +  = 
0.50 + 0.80 = _____

4.  +  = 
0.30 + 0.80 = _____