



Name \_\_\_\_\_

# Bradley!


**Directions:** Circle the fraction that shows what part of each set is shaded.




$\frac{3}{5}$        $\frac{1}{5}$        $\frac{2}{5}$



$\frac{4}{5}$        $\frac{2}{5}$        $\frac{3}{5}$



$\frac{1}{4}$        $\frac{2}{4}$        $\frac{3}{4}$



$\frac{3}{6}$        $\frac{4}{6}$        $\frac{2}{6}$



$\frac{1}{4}$        $\frac{2}{4}$        $\frac{3}{4}$



$\frac{2}{3}$   
 $\frac{3}{3}$        $\frac{1}{3}$

