



Name \_\_\_\_\_

### Telling Time to the Half Hour


Put the clock hands on the clocks to show the correct time.




3:30




7:30




10:30



4:30

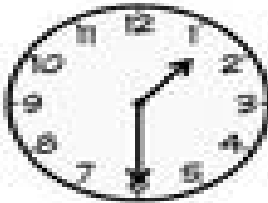


1:30



9:30

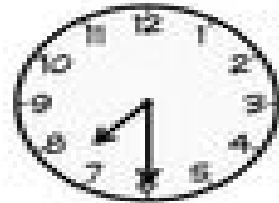
Look at the clocks. Print the time in DIGITAL form underneath.



\_\_\_\_\_



\_\_\_\_\_



\_\_\_\_\_

\*Remember: Digital time is written like \_\_\_\_ : \_\_\_\_