



Solving Systems of Inequalities

Graph the solution to each system of inequalities.


21. $y < x + 2$
 $x < 4$



22. $y < x + 2$
 $y > 2x + 2$



23. $x > \frac{2}{3}y + 2$
 $x < -2y + 2$



24. $x < 2y + 6$
 $x > \frac{2}{3}y + 2$

