



### What time is it?


Look at the clocks below. Draw the second clock hand to display the time shown at the bottom of each clock.



**1:00**




**7:00**




**10:00**



**6:00**



**9:00**




**8:00**



**2:00**



**4:00**



**11:00**