
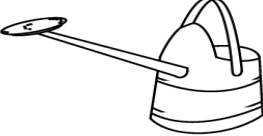


Guess The Capacity


Name _____


- 400ml
- 400cl
- 4l



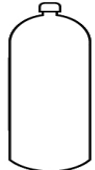
- 90ml
- 900cl
- 18l



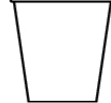
- 100ml
- 1cl
- 10l



- 200ml
- 2000cl
- 2l

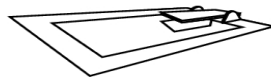


- 10ml
- 100cl
- 1l



- 50ml
- 500cl
- 5l

Which unit of measurement best fits the capacity of the objects below?



Millilitres Litres Centilitres

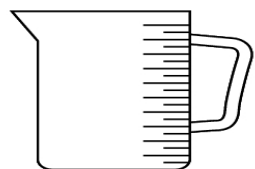


Litres Centilitres Millilitres



Centilitres Millilitres Litres

The measuring jug hold 1 litre of orange juice.



- a) How many 100ml cups can you fill? _____
- b) How many 500ml cups can you fill? _____
- c) How many .25l cups can you fill? _____
- d) How many 10cl cups can you fill? _____