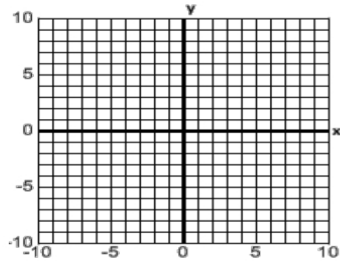


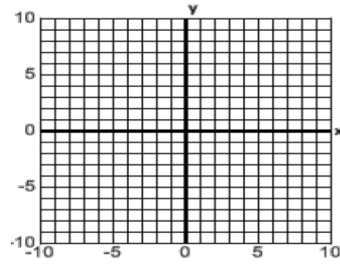
Standard H.2A.7.C3: I can graph inequalities with two variables (coordinate plane)

Directions: Graph each inequality

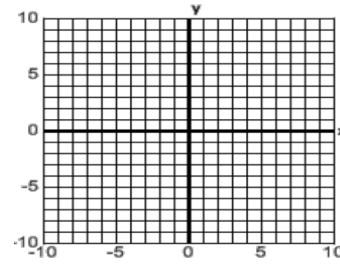
1.  $y > -3x - 7$



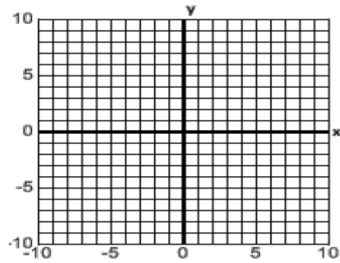
2.  $y \leq -\frac{2}{5}x - 4$



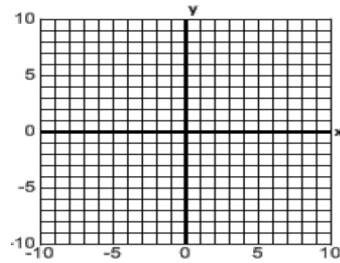
3.  $y < \frac{3}{4}x + 3$



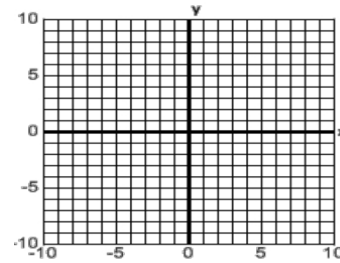
4.  $y \geq -4$



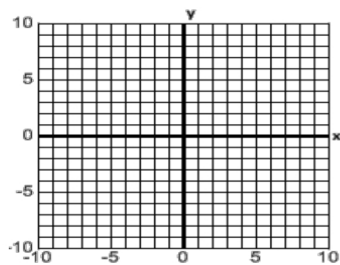
5.  $x < 8$



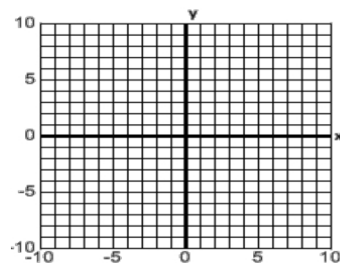
6.  $y \geq -5x - 8$



7.  $y > -\frac{7}{4}x - 2$



8.  $y \geq x + 6$



9.  $y < 4x$

