

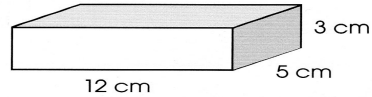
Name _____

Use a formula to find volume. Show your work.

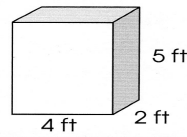
Formulas for Volume of a Rectangular Prism	
Volume = base (area of) x height	$V = b \times h$
Volume = length x width x height	$V = l \times w \times h$

Remember:
You can multiply in any order.

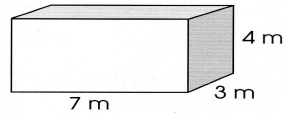
1 length _____ width _____ height _____
area of base _____
Volume _____



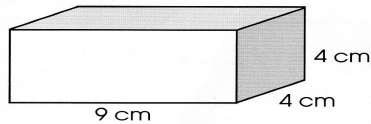
2 length _____ width _____ height _____
area of base _____
Volume _____



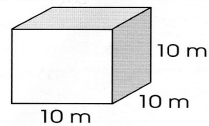
3 length _____ width _____ height _____
area of base _____
Volume _____



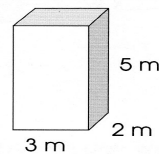
4 length _____ width _____ height _____
area of base _____
Volume _____



5 length _____ width _____ height _____
area of base _____
Volume _____



6 length _____ width _____ height _____
area of base _____
Volume _____



★ **Tell how you found the volume.**