

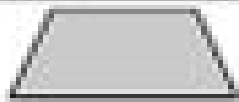








Name: _____ Date: _____

4.G.2

Quadrilaterals & Triangles

Directions: Name & describe each shape.

| | | |
|---|---|---|
|  <p>Name: _____ Description: _____ _____ _____</p> |  <p>Name: _____ Description: _____ _____ _____</p> |  <p>Name: _____ Description: _____ _____ _____</p> |
|  <p>Name: _____ Description: _____ _____ _____</p> |  <p>Name: _____ Description: _____ _____ _____</p> |  <p>Name: _____ Description: _____ _____ _____</p> |
|  <p>Name: _____ Description: _____ _____ _____</p> |  <p>Name: _____ Description: _____ _____ _____</p> |  <p>Name: _____ Description: _____ _____ _____</p> |