

Name: _____


Christmas Shopping

The children below have been doing their Christmas shopping.

Sally spent exactly 30p, Bob spent exactly 40p and Helen spent exactly 50p.

Each child bought two things. Can you work out what they bought?

Sally



30p

Bob




40p


Helen



50p



Laptop: 23p



Train: 21p



Car: 16p



Chocolates: 9p



Hot: 27p



Socks: 24p

Sally	Bob	Helen