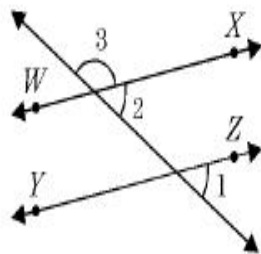


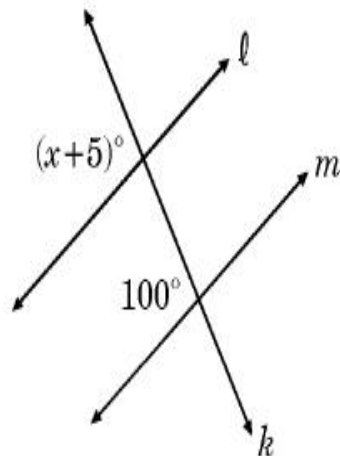
\overleftrightarrow{WX} is parallel to \overleftrightarrow{YZ} . If the measure of $\angle 3$ is 150° , what is the measure of $\angle 1$?

- a) 150° b) 120°
 c) 90° d) 30°

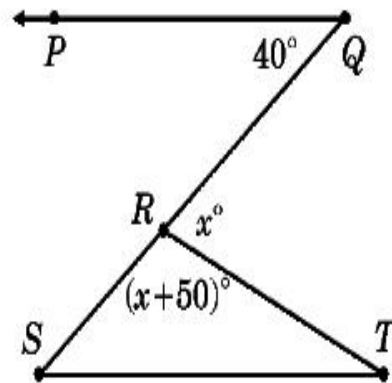


In the diagram below, $l \parallel m$. Identify the value of x .

- a) 90 b) 95
 c) 100 d) 105



In the diagram below, $\overline{PQ} \parallel \overline{ST}$



Identify the measure of $\angle T$

- (A) 25°
 (B) 40°
 (C) 45°
 (D) 50°