



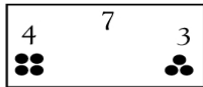
Fact families

Finish the fact family for this group of numbers.

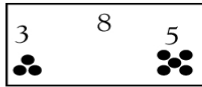


$5 + 4 =$	9
$4 + 5 =$	9
$9 - 4 =$	5
$9 - 5 =$	4

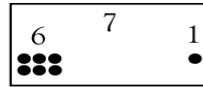
Finish the fact family for each group of numbers.



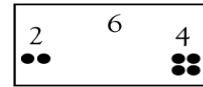
$4 + 3 =$	<input type="text"/>
$3 + 4 =$	<input type="text"/>
$7 - 3 =$	<input type="text"/>
$7 - 4 =$	<input type="text"/>




$3 + 5 =$	<input type="text"/>
$5 + 3 =$	<input type="text"/>
$8 - 5 =$	<input type="text"/>
$8 - 3 =$	<input type="text"/>



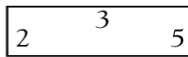
$6 + 1 =$	<input type="text"/>
$1 + 6 =$	<input type="text"/>
$7 - 1 =$	<input type="text"/>
$7 - 6 =$	<input type="text"/>



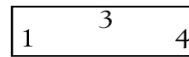
$2 + 4 =$	<input type="text"/>
$4 + 2 =$	<input type="text"/>
$6 - 4 =$	<input type="text"/>
$6 - 2 =$	<input type="text"/>



$2 + 7 =$	<input type="text"/>
$7 + 2 =$	<input type="text"/>
$9 - 2 =$	<input type="text"/>
$9 - 7 =$	<input type="text"/>




$3 + 2 =$	<input type="text"/>
$2 + 3 =$	<input type="text"/>
$5 - 2 =$	<input type="text"/>
$5 - 3 =$	<input type="text"/>




$3 + 1 =$	<input type="text"/>
$1 + 3 =$	<input type="text"/>
$4 - 1 =$	<input type="text"/>
$4 - 3 =$	<input type="text"/>




$2 + 8 =$	<input type="text"/>
$8 + 2 =$	<input type="text"/>
$10 - 2 =$	<input type="text"/>
$10 - 8 =$	<input type="text"/>



$5 + 5 =$	<input type="text"/>
$10 - 5 =$	<input type="text"/>



$4 + 4 =$	<input type="text"/>
$8 - 4 =$	<input type="text"/>

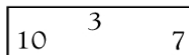


$3 + 3 =$	<input type="text"/>
$6 - 3 =$	<input type="text"/>

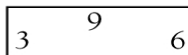


$2 + 2 =$	<input type="text"/>
$4 - 2 =$	<input type="text"/>

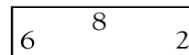
Finish the fact family for each group of numbers.



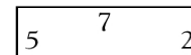
<input type="text"/>
<input type="text"/>
<input type="text"/>
<input type="text"/>



<input type="text"/>
<input type="text"/>
<input type="text"/>
<input type="text"/>



<input type="text"/>
<input type="text"/>
<input type="text"/>
<input type="text"/>



<input type="text"/>
<input type="text"/>
<input type="text"/>
<input type="text"/>