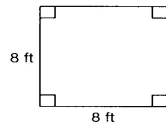


Area/Perimeter of Squares/Rectangles

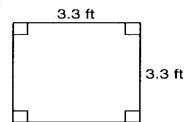
Date _____ Period _____

Find the PERIMETER of each square. Show all of your work as taught in class.

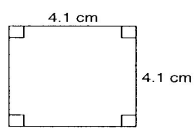
1)



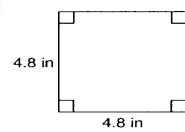
2)



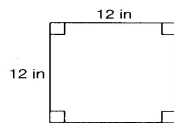
3)



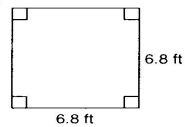
4)

**Find the AREA of each square. Show all of your work as taught in class.**

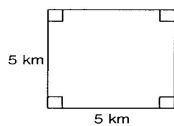
5)



6)



7)



8)

