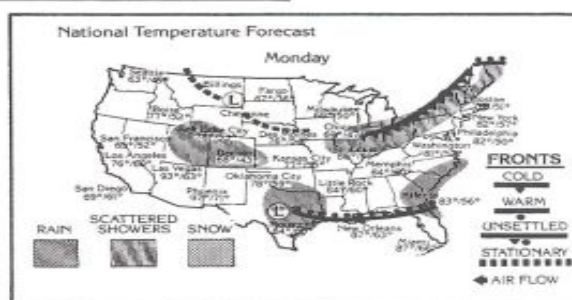
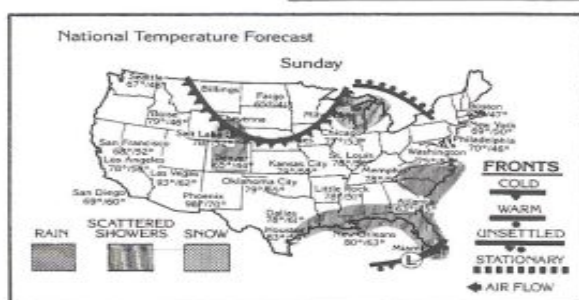
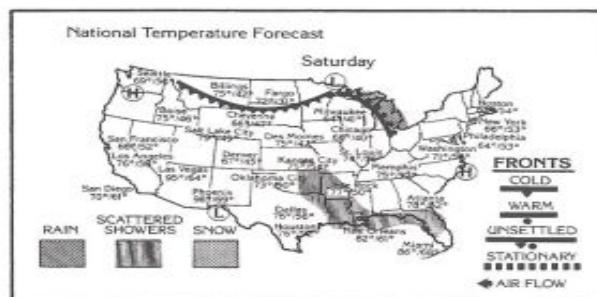


## Weather Forecasting



Observe the movement of highs and lows and fronts on the weather maps for Saturday, Sunday, and Monday on the maps shown above. Then make the following weather predictions for Tuesday.

1. What large city in Texas will have its fourth day of rain? \_\_\_\_\_
2. What will be the approximate high temperature for Atlanta? \_\_\_\_\_
3. What will be the general weather conditions for Oklahoma City? \_\_\_\_\_  
\_\_\_\_\_
4. What will be the high temperatures in the Great Lakes region? \_\_\_\_\_
5. What will be the general weather conditions in Phoenix, AZ? \_\_\_\_\_
6. Will Miami, FL, be warmer or cooler? \_\_\_\_\_
7. Will Chicago, IL, be clear or rainy? \_\_\_\_\_
8. What kind of front will have passed through Philadelphia, PA? \_\_\_\_\_
9. What kind of front will have passed through New Orleans, LA? \_\_\_\_\_