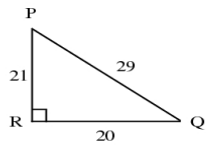


Geometry B 1st Semester Exam Study Guide

Short Answer

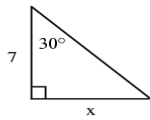
1. Write the tangent ratios for $\angle P$ and $\angle Q$.



Not drawn to scale

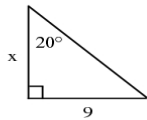
Find the value of x . Round your answer to the nearest tenth.

- 2.



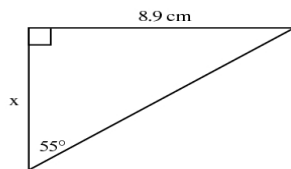
Not drawn to scale

- 3.



Not drawn to scale

- 4.



Find the value of x to the nearest degree.