














WHAT TIME IS IT?

 1:50	 12:00	 7:30	 10:10
 3:45	 4:30	 11:15	 12:30
 10:00	 1:30	 9:00	 6:00

Now draw the hands of the clock.

 1:15	 1:45	 1:30	 1:00
 1:15	 1:45	 1:30	 1:00
 1:15	 1:45	 1:30	 1:00