


Name and Date _____

Telling Time to the Half Hour


Please draw a line from the clock to the correct time.




3:30
9:30



7:30
1:30



5:30
10:30



7:30
2:30

Please write the time that is shown on the clock.





