



St. Patrick's Day Addition


sums to 50


Help Mr. Green find the answers to the addition problems by writing the sum in the shamrock below each problem.


$$\begin{array}{r} 22 \\ + 14 \\ \hline \end{array}$$



$$\begin{array}{r} 31 \\ + 17 \\ \hline \end{array}$$



$$\begin{array}{r} 11 \\ + 24 \\ \hline \end{array}$$


$$\begin{array}{r} 19 \\ + 10 \\ \hline \end{array}$$


$$\begin{array}{r} 33 \\ + 14 \\ \hline \end{array}$$



$$\begin{array}{r} 42 \\ + 6 \\ \hline \end{array}$$



$$\begin{array}{r} 12 \\ + 12 \\ \hline \end{array}$$



$$\begin{array}{r} 13 \\ + 16 \\ \hline \end{array}$$



$$\begin{array}{r} 32 \\ + 5 \\ \hline \end{array}$$


$$\begin{array}{r} 50 \\ + 0 \\ \hline \end{array}$$



$$\begin{array}{r} 25 \\ + 21 \\ \hline \end{array}$$



$$\begin{array}{r} 13 \\ + 20 \\ \hline \end{array}$$



$$\begin{array}{r} 11 \\ + 27 \\ \hline \end{array}$$


$$\begin{array}{r} 43 \\ + 3 \\ \hline \end{array}$$


$$\begin{array}{r} 23 \\ + 4 \\ \hline \end{array}$$


$$\begin{array}{r} 35 \\ + 13 \\ \hline \end{array}$$


$$\begin{array}{r} 15 \\ + 34 \\ \hline \end{array}$$


$$\begin{array}{r} 18 \\ + 30 \\ \hline \end{array}$$


$$\begin{array}{r} 37 \\ + 2 \\ \hline \end{array}$$


$$\begin{array}{r} 40 \\ + 10 \\ \hline \end{array}$$
