

Name : \_\_\_\_\_

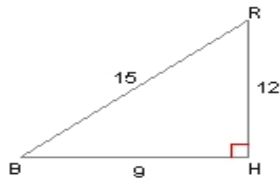
Score : \_\_\_\_\_

Teacher : \_\_\_\_\_

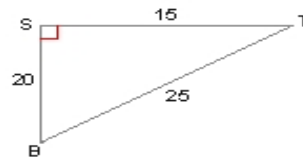
Date : \_\_\_\_\_

### Trigonometric Ratios

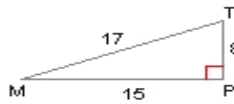
1)  $\tan B =$  \_\_\_\_\_



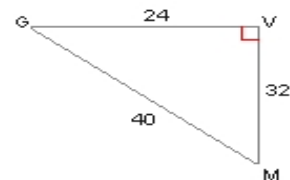
2)  $\cos B =$  \_\_\_\_\_



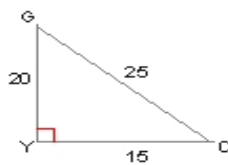
3)  $\tan M =$  \_\_\_\_\_



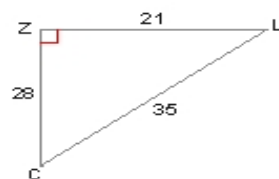
4)  $\sin G =$  \_\_\_\_\_



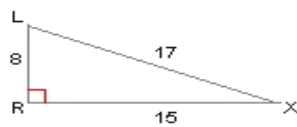
5)  $\tan G =$  \_\_\_\_\_



6)  $\cos C =$  \_\_\_\_\_



7)  $\tan X =$  \_\_\_\_\_



8)  $\sin O =$  \_\_\_\_\_

