

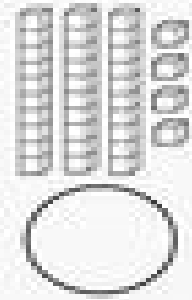

Name \_\_\_\_\_

# Unit 9 test


42 = \_\_\_ tens \_\_\_ ones

35 = \_\_\_ tens \_\_\_ ones

28 = \_\_\_ tens \_\_\_ ones



Color in 36. Fill in the blanks.



\_\_\_ tens \_\_\_ ones


\_\_\_ + \_\_\_ = \_\_\_

5 tens 3 ones = \_\_\_

2 tens 5 ones = \_\_\_

4 tens 6 ones = \_\_\_

Color in 48. Fill in the blanks.



\_\_\_ tens \_\_\_ ones

\_\_\_ + \_\_\_ = \_\_\_

20 + 4 = \_\_\_    40 + 3 = \_\_\_

30 + 7 = \_\_\_    10 + 2 = \_\_\_

Write 26 in expanded form.

\_\_\_ + \_\_\_

Write 45 in expanded form.

\_\_\_ + \_\_\_