



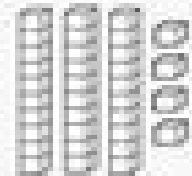
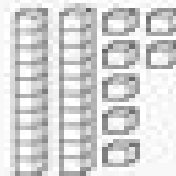
Name _____

Unit 9 test


42 = ___ tens ___ ones

35 = ___ tens ___ ones

28 = ___ tens ___ ones



Color in 36. Fill in the blanks.



___ tens ___ ones


___ + ___ = ___

5 tens 3 ones = ___

2 tens 5 ones = ___

4 tens 6 ones = ___

Color in 48. Fill in the blanks.



___ tens ___ ones

___ + ___ = ___

20 + 4 = ___ 40 + 3 = ___

30 + 7 = ___ 10 + 2 = ___

Write 26 in expanded form.

___ + ___

Write 45 in expanded form.

___ + ___